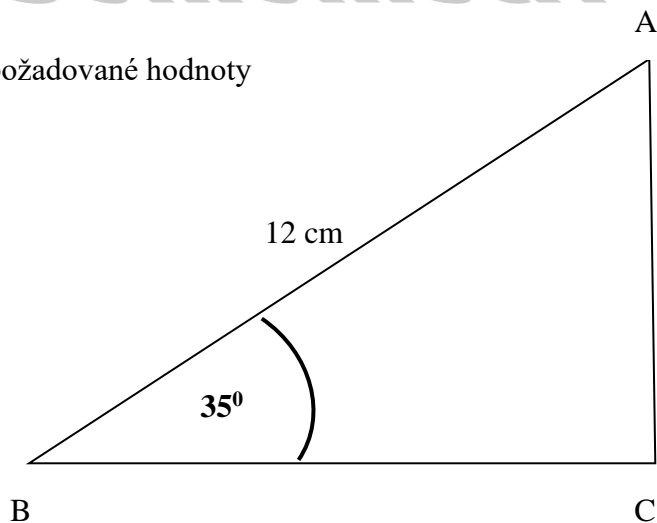


Goniometrické f-*ce*

1. Vypočítej požadované hodnoty

$$b =$$

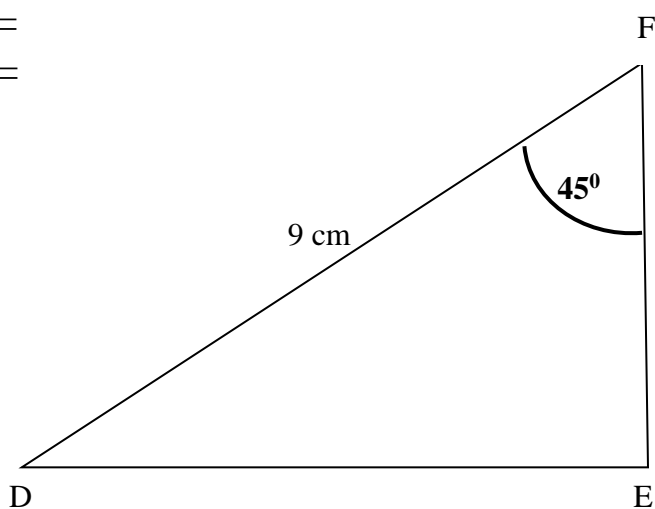
$$a =$$



2. Vypočítej požadované hodnoty

$$d =$$

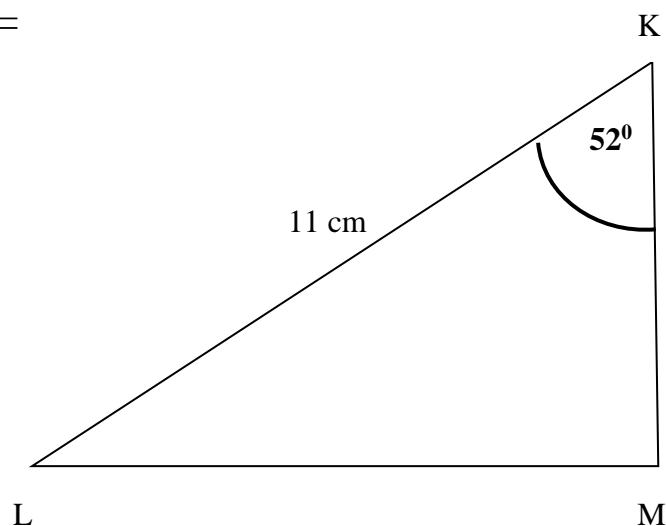
$$f =$$



3. Vypočítej požadované hodnoty

$$k =$$

$$l =$$

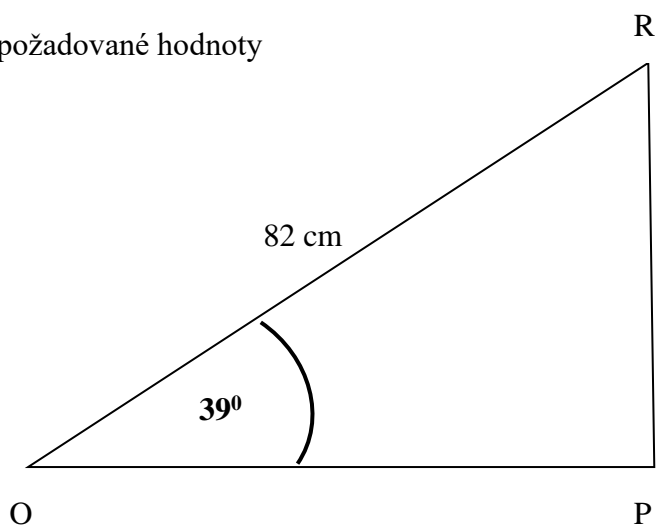


9. ročník – Goniometrické funkce

4. Vypočítej požadované hodnoty

$o =$

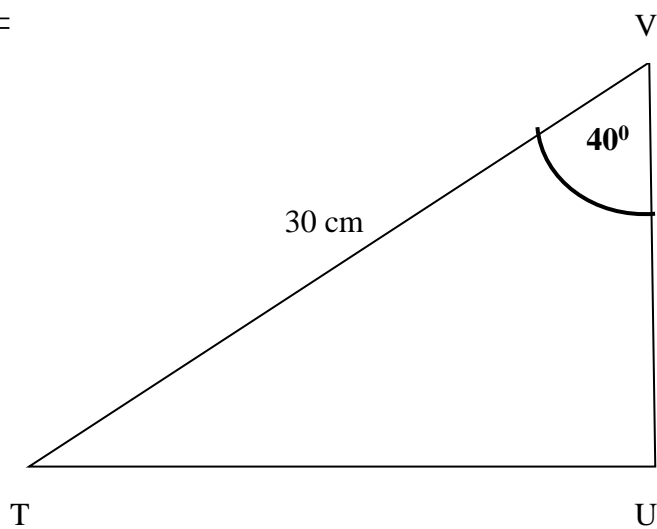
$r =$



5. Vypočítej požadované hodnoty

$t =$

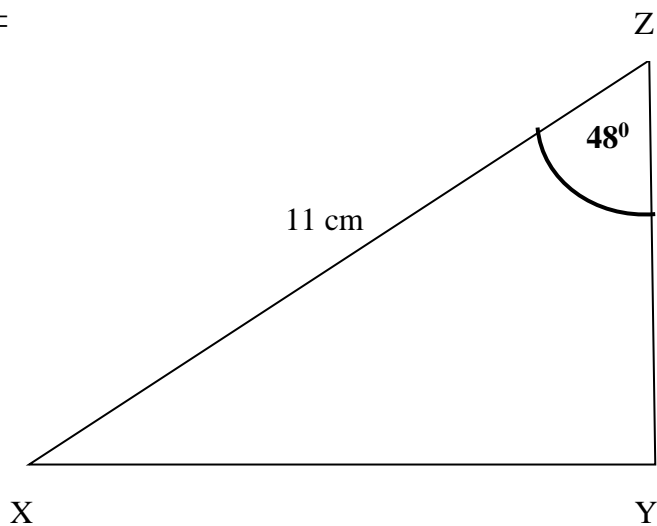
$v =$



6. Vypočítej požadované hodnoty

$x =$

$z =$

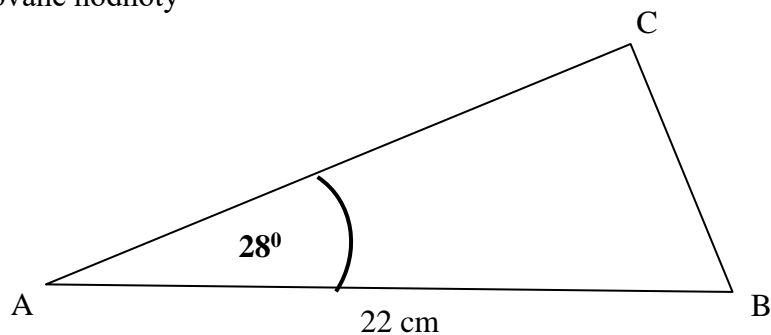


9. ročník – Goniometrické funkce

7. Vypočítej požadované hodnoty

$$a =$$

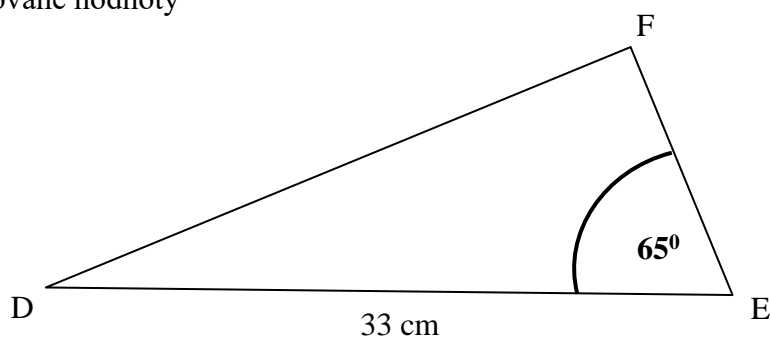
$$b =$$



8. Vypočítej požadované hodnoty

$$d =$$

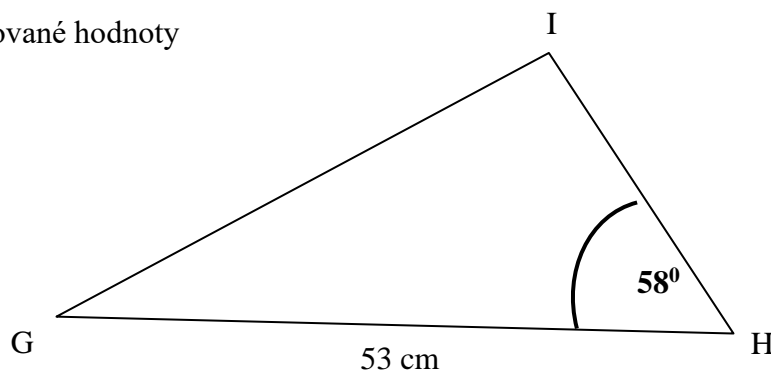
$$e =$$



9. Vypočítej požadované hodnoty

$$g =$$

$$h =$$



- 1. $a = 9,83 \text{ cm}; b = 6,88 \text{ cm}$
- 2. $d = 6,36 \text{ cm}; f = 6,36 \text{ cm}$
- 3. $k = 8,67 \text{ cm}; l = 6,77 \text{ cm}$
- 4. $o = 51,6 \text{ cm}; r = 63,73 \text{ cm}$
- 5. $t = 22,98 \text{ cm}; v = 19,28 \text{ cm}$
- 6. $x = 7,36 \text{ cm}; z = 8,17 \text{ cm}$
- 7. $a = 10,33 \text{ cm}; b = 19,42 \text{ cm}$
- 8. $d = 13,95 \text{ cm}; e = 29,91 \text{ cm}$
- 9. $g = 28,09 \text{ cm}; h = 44,95 \text{ cm}$